

WORKSHEET: Bass Clef Note Names

Write the note name under each pitch in the following examples (for instance, C, D#, E♭).
Do not give enharmonic equivalencies

1. 2. 3. 4. 5.

6. 7. 8. 9. 10.

11. 12. 13. 14. 15.

16. 17. 18. 19. 20.


21. 22. 23. 24. 25.

WORKSHEET: Bass Clef Note Names

ANSWERS


Write the note name under each pitch in the following examples (for instance, C, D#, Eb).
Do not give enharmonic equivalencies

1. 2. 3. 4. 5.



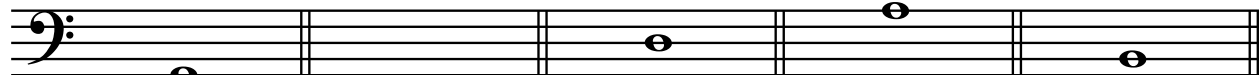
F C A E B

6. 7. 8. 9. 10.




A D G C F

11. 12. 13. 14. 15.




G E D A B

16. 17. 18. 19. 20.



C# D# F# G# A#

21. 22. 23. 24. 25.



Db Gb Ab Eb Bb