

**WORKSHEET: Treble Clef Note Names**

Write the note name under each pitch in the following examples (for instance, C, D#, Eb).  
Do not give enharmonic equivalencies

1. 2. 3. 4. 5.

\_\_\_\_\_

6. 7. 8. 9. 10.

\_\_\_\_\_

11. 12. 13. 14. 15.

\_\_\_\_\_

16. 17. 18. 19. 20.

\_\_\_\_\_

21. 22. 23. 24. 25.


\_\_\_\_\_

WORKSHEET: Treble Clef Note Names

ANSWERS

Write the note name under each pitch in the following examples (for instance, C, D#, Eb). Do not give enharmonic equivalencies


1. 2. 3. 4. 5.



A musical staff with a treble clef. It contains five measures, each with a single note. The notes are: 1. G (second line), 2. B (third space), 3. C (third space), 4. E (fourth space), 5. F (first space).

G B C E F


6. 7. 8. 9. 10.



A musical staff with a treble clef. It contains five measures, each with a single note. The notes are: 6. F (first space), 7. C (third space), 8. G (third space), 9. D (fourth space), 10. A (first space).

F C G D A


11. 12. 13. 14. 15.



A musical staff with a treble clef. It contains five measures, each with a single note. The notes are: 11. B (second line), 12. E (third space), 13. A (third space), 14. D (fourth space), 15. G (first space).

B E A D G


16. 17. 18. 19. 20.



A musical staff with a treble clef. It contains five measures, each with a single note. The notes are: 16. A# (second line), 17. D# (third space), 18. G# (third space), 19. F# (fourth space), 20. C# (first space).

A# D# G# F# C#

21. 22. 23. 24. 25.



A musical staff with a treble clef. It contains five measures, each with a single note. The notes are: 21. Eb (second line), 22. Gb (third space), 23. Bb (third space), 24. Ab (fourth space), 25. Db (first space).

Eb Gb Bb Ab Db